

Surname	Centre Number	Candidate Number
Other Names		0



**GCSE**

3300U10-1



**MATHEMATICS  
UNIT 1: NON-CALCULATOR  
FOUNDATION TIER**

MONDAY, 12 NOVEMBER 2018 – MORNING

1 hour 30 minutes

**ADDITIONAL MATERIALS**

The use of a calculator is not permitted in this examination.  
A ruler, protractor and a pair of compasses may be required.

**INSTRUCTIONS TO CANDIDATES**

Use black ink or black ball-point pen. Do not use gel pen or correction fluid.

You may use a pencil for graphs and diagrams only.

Write your name, centre number and candidate number in the spaces at the top of this page.

Answer **all** the questions in the spaces provided.

If you run out of space, use the continuation page at the back of the booklet. Question numbers must be given for all work written on the continuation page.

Take  $\pi$  as 3.14.

**INFORMATION FOR CANDIDATES**

You should give details of your method of solution when appropriate.

Unless stated, diagrams are not drawn to scale.

Scale drawing solutions will not be acceptable where you are asked to calculate.

The number of marks is given in brackets at the end of each question or part-question.

In question 6, the assessment will take into account the quality of your linguistic and mathematical organisation, communication and accuracy in writing.

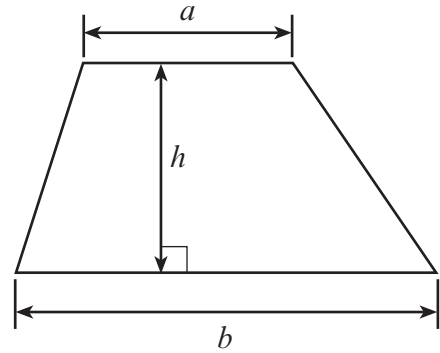
For Examiner's use only		
Question	Maximum Mark	Mark Awarded
1.	5	
2.	2	
3.	2	
4.	1	
5.	1	
6.	5	
7.	2	
8.	3	
9.	2	
10.	3	
11.	3	
12.	2	
13.	2	
14.	6	
15.	5	
16.	4	
17.	4	
18.	3	
19.	3	
20.	1	
21.	6	
<b>Total</b>	<b>65</b>	



NOV183300U10101

## Formula List - Foundation Tier

**Area of trapezium**  $= \frac{1}{2} (a + b)h$



1. (a) What number must be added to 186 to make 324? [1]

.....  
.....  
.....

Number is .....

(b) Divide 568 by 8. [1]

.....  
.....  
.....

(c) Add 986 and 75. [1]

.....  
.....  
.....

(d) (i) Place one of +, -, × or ÷ in each space in the calculation below to make it correct. [1]

5 ..... 3 ..... 4 = 19

.....  
.....  
.....

(ii) Calculate  $48 - 7 \times 5$ . [1]

.....  
.....

3300U101  
03



2. (a) Which metric unit is best used to measure the distance from Cardiff to Manchester?  
Circle the correct answer. [1]

millimetres                  kilometres                  metres                  litres                  centimetres

(b) Which metric unit is best used to measure the mass of a person?  
Circle the correct answer. [1]

kilograms                  grams                  tonnes                  kilometres                  milligrams

3. Jo thinks of a number.  
Her number lies between 30 and 50.  
Jo's number is a multiple of 3.  
Jo's number is also a multiple of 7.  
  
What number does Jo think of? [2]

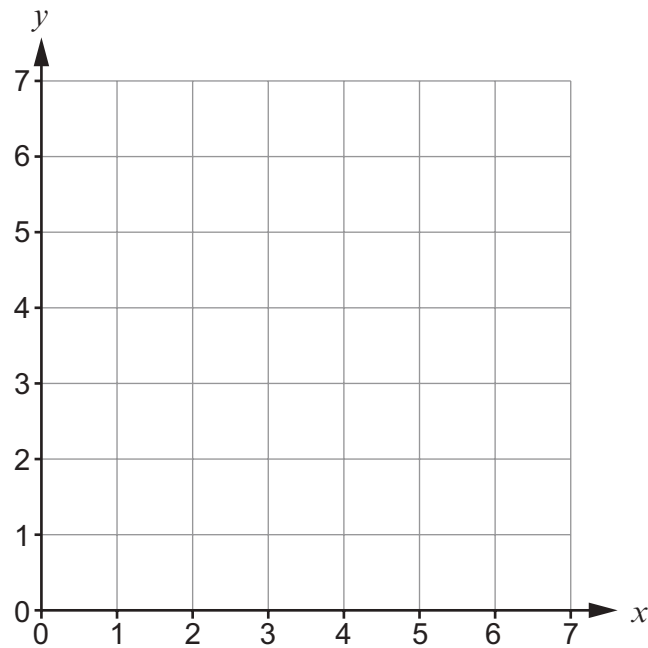
.....  
.....  
.....  
.....

Jo's number is .....




4. On the grid below, plot the point  $A(4, 6)$ .

[1]



5. Measure the length of a **diagonal** of this rectangle.  
Write down your answer in the space provided.

[1]



Length of diagonal = ..... cm



6. *In this question, you will be assessed on the quality of your organisation, communication and accuracy in writing.*

A journey takes 2 hours 35 minutes.  
The journey finishes at 7 p.m.

At what time did it begin?  
Write your answer in 24-hour clock time.  
You must show all your working.

[3 + 2 OCW]

.....

.....

.....

.....

.....

.....

.....

.....

.....

.....

7. (a) Write 312 cm in metres. [1]

.....

312 cm = ..... m

(b) Write 9.07 km in metres. [1]

.....

9.07 km = ..... m



8. (a) Mark has some cards. Each card has a number written on it.  
These are Mark's cards.  
The number on the last card is missing.



Write a number on the last card so that the mode of these numbers is an odd number.

[1]

.....

.....

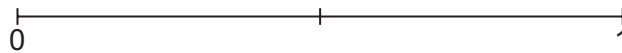
- (b) Jane has a different set of cards.  
These are Jane's cards.



Jane chooses a card at random from her set of cards.

On the probability scale below, mark the points A and B where:

- (i) A is the probability of Jane choosing a number less than 10, [1]
- (ii) B is the probability of Jane choosing the number 15. [1]



9. (a) Work out  $9 \times 0.4$

[1]

.....  
.....  
.....

(b) Work out  $17.3 + 8.6$

[1]

.....  
.....  
.....

10. Which of the following amounts is larger?

- 15% of £600, OR
- $\frac{1}{4}$  of £320

You must show all your working.

[3]

.....  
.....  
.....  
.....  
.....  
.....

Larger amount is £ .....





11. In the diagram below,

- $ABCD$  is a square,
- $ADE$  is an equilateral triangle,
- $EAF$  is a straight line.

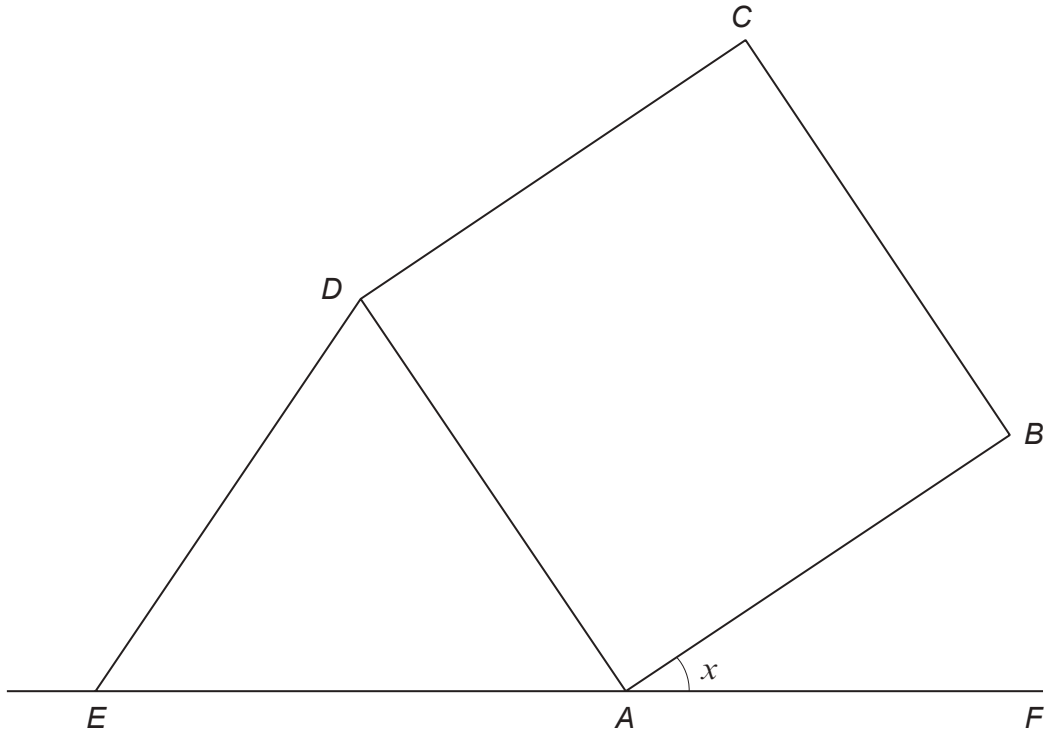


Diagram not drawn to scale

Calculate the size of angle  $x$ .  
You must show all your working.

[3]

.....

.....

.....

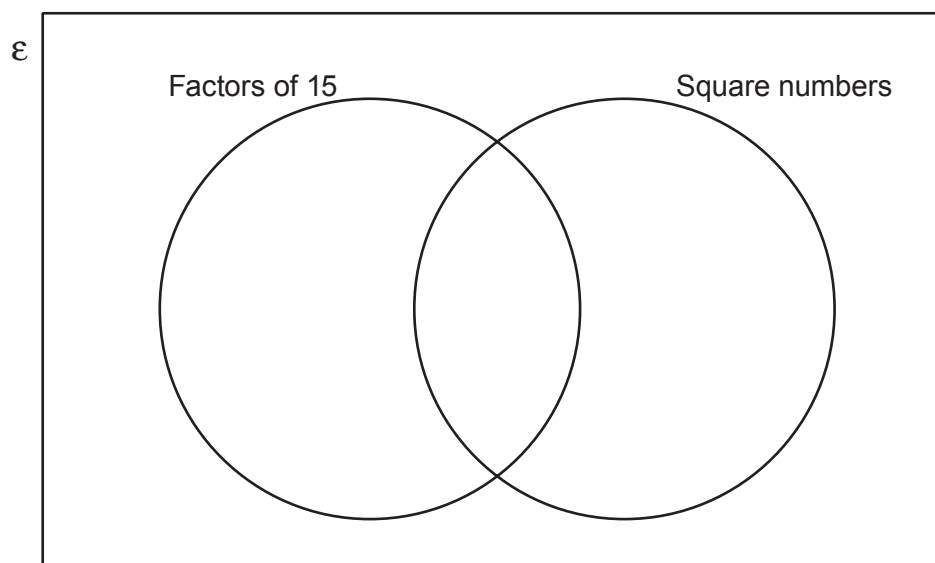
.....

$x = \text{.....}^\circ$



12. Place the numbers 1, 2, 3, 4, 5 in the Venn diagram below.

[2]



*Space for working:*

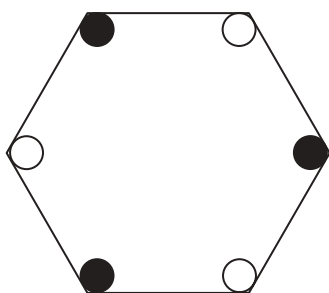
.....

.....

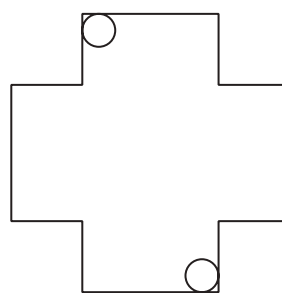
.....

13. Write down the order of rotational symmetry for each of the following.

[2]



.....



.....



14. (a) Simplify the expression  $15x - 2y - 7x - 4y$ . [2]

.....  
.....

(b) Solve the equation  $2m - 7 = 12$ . [2]

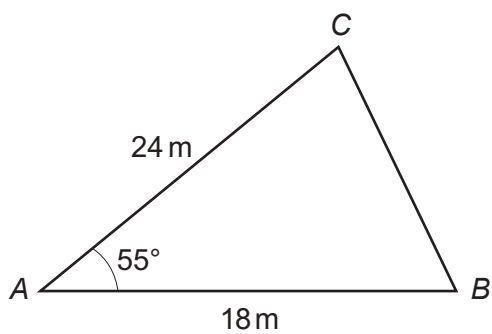
.....  
.....  
.....  
.....

(c) Calculate the value of  $5f + 3g$  when  $f = -4$  and  $g = 7$ . [2]

.....  
.....  
.....



15.



*Diagram not drawn to scale*

- (a) Draw an accurate scale drawing of the triangle shown above.  
Use the scale:

**1 centimetre represents 3 metres.**

[3]

.....

.....



(b) Use your scale drawing to calculate the **actual** length of side *BC*.  
Give your answer in metres.

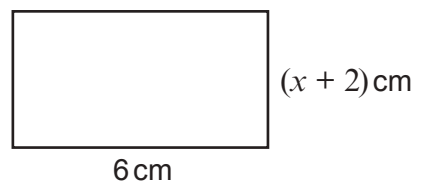
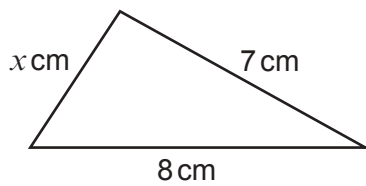
[2]

.....

.....

Actual length of *BC* = ..... metres

16. A triangle and a rectangle are shown below.



*Diagrams not drawn to scale*

The perimeter of the triangle is 18 cm.

Calculate the area of the rectangle.

[4]

.....

.....

.....

.....

.....

.....

.....



17. (a) Estimate the answer to  $\frac{59 \times 301}{1997}$ .

You must show all your working.

[2]

.....

.....

.....

.....

(b) Given that  $341 \times 57 = 19\,437$ , write down the answer to each of the following.

(i)  $3.41 \times 5.7$

[1]

.....

(ii)  $\frac{19\,437}{570}$

[1]

.....

.....





19. (a)

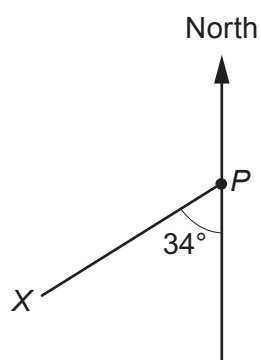


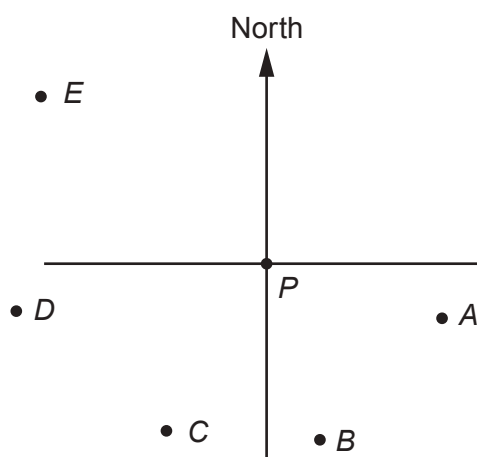
Diagram not drawn to scale

What is the bearing of X from point P?  
Circle the correct answer.

[1]

146°      326°      214°      034°      234°

(b) The diagram below shows 6 points on a map. The diagram is drawn to scale.



- (i) A ship sails from point P on a bearing of  $107^\circ$ .  
It sails towards one of the five points A, B, C, D or E.  
Which of the five points is the ship sailing towards?  
Circle the correct answer.

[1]

A                  B                  C                  D                  E

- (ii) A second ship sails from point P for a number of miles on a bearing of  $070^\circ$ .  
It then changes direction and sails on a bearing of  $270^\circ$ .  
It is possible for the ship to reach **only one** of the five points A, B, C, D or E.  
Which point can the ship reach?  
Circle the correct answer.

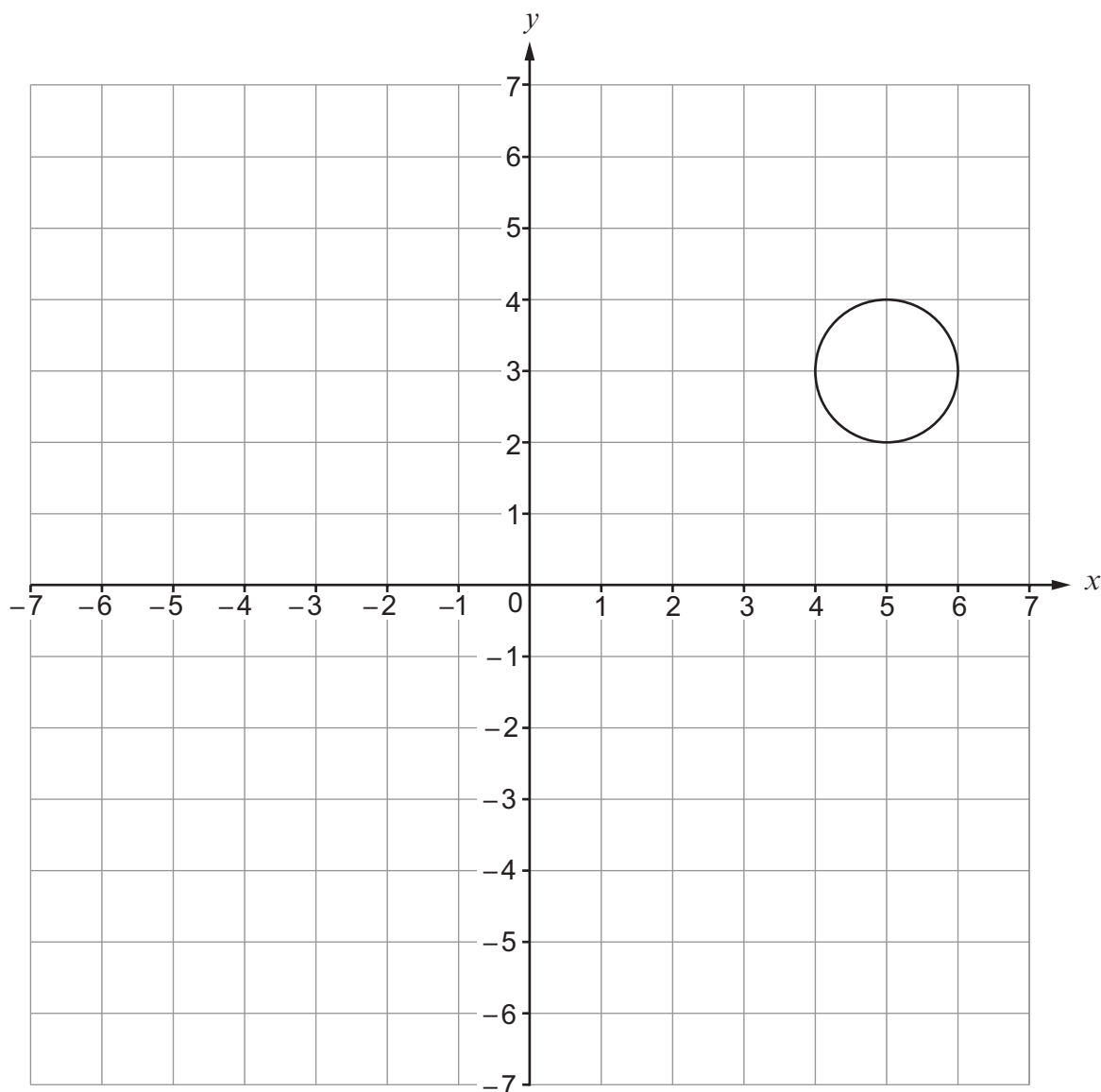
[1]

A                  B                  C                  D                  E





20. The circle shown below is rotated  $90^\circ$  anticlockwise about the origin.



What are the coordinates of the centre of the circle at its new position?  
Circle the correct answer.

[1]

 (3, -5) (-5, -3) (-3, -5) (-3, 5) (3, 5)

21.

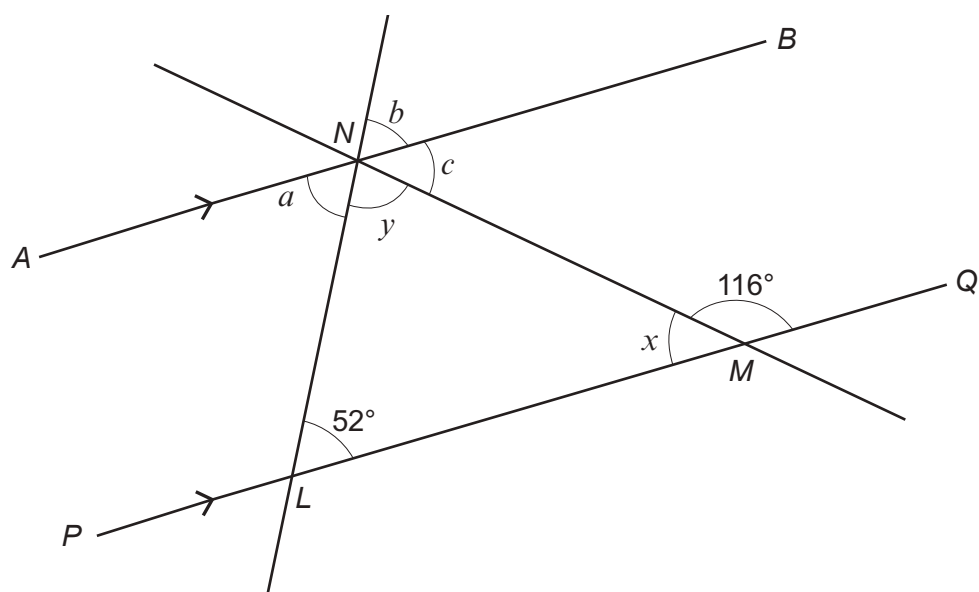


Diagram not drawn to scale

Line  $AB$  is parallel to line  $PQ$ .

(a) Find the size of each of the angles  $a$ ,  $b$  and  $c$ .

[3]

.....

.....

.....

.....

.....

$$a = \text{.....}^\circ \quad b = \text{.....}^\circ \quad c = \text{.....}^\circ$$



- (b) Find the size of each of the angles  $x$  and  $y$ .  
**Hence** give the special name for triangle  $LMN$ .

[3]

.....

.....

.....

.....

$$x = \text{.....}^\circ \quad y = \text{.....}^\circ$$

The special name for triangle  $LMN$  is .....

**END OF PAPER**



