

Candidate Name	Centre Number					Candidate Number				
						0				



GCSE

**MATHEMATICS
UNIT 2: CALCULATOR-ALLOWED
HIGHER TIER**

2nd SPECIMEN PAPER SUMMER 2017

1 HOUR 45 MINUTES

ADDITIONAL MATERIALS

A calculator will be required for this paper.
A ruler, protractor and a pair of compasses may be required.

INSTRUCTIONS TO CANDIDATES

Write your name, centre number and candidate number in the spaces at the top of this page.

Answer **all** the questions in the spaces provided in this booklet.

Take π as 3.14 or use the π button on your calculator.

INFORMATION FOR CANDIDATES

You should give details of your method of solution when appropriate.

Unless stated, diagrams are not drawn to scale.

Scale drawing solutions will not be acceptable where you are asked to calculate.

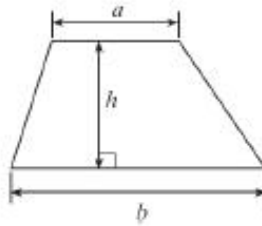
The number of marks is given in brackets at the end of each question or part-question.

The assessment will take into account the quality of your linguistic and mathematical organisation, communication and accuracy in writing in question **9**.

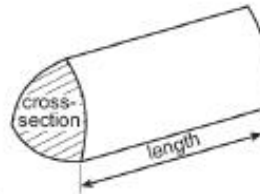
For Examiner's use only		
Question	Maximum Mark	Mark Awarded
1.	5	
2.	2	
3.	4	
4.	6	
5.	3	
6.	6	
7.	7	
8.	5	
9.	7	
10.	5	
11.	3	
12.	7	
13.	6	
14.	7	
15.	7	
TOTAL	80	

Formula list – Higher tier

Area of a trapezium = $\frac{1}{2}(a+b)h$



Volume of a prism = area of cross section \times length



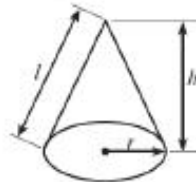
Volume of a sphere = $\frac{4}{3}\pi r^3$

Surface area of a sphere = $4\pi r^2$



Volume of a cone = $\frac{1}{3}\pi r^2 h$

Curved surface area of a cone = $\pi r l$

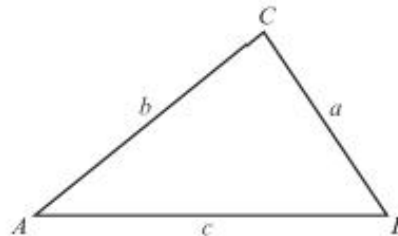


In any triangle ABC ,

Sine rule: $\frac{a}{\sin A} = \frac{b}{\sin B} = \frac{c}{\sin C}$

Cosine rule: $a^2 = b^2 + c^2 - 2bc \cos A$

Area of triangle = $\frac{1}{2}ab \sin C$



The Quadratic Equation


The solutions of $ax^2 + bx + c = 0$ where $a \neq 0$ are given by $x = \frac{-b \pm \sqrt{b^2 - 4ac}}{2a}$

Annual Equivalent Rate (AER)

AER, as a decimal, is calculated using the formula $\left(1 + \frac{i}{n}\right)^n - 1$, where i is the nominal interest rate per annum as a decimal and n is the number of compounding periods per annum.

1. Use a ruler and a pair of compasses to construct triangle ABC where $AC = 10.5$ cm, $\hat{ACB} = 60^\circ$ and $\hat{CAB} = 45^\circ$.
Line AC has been drawn for you.

[5]



2. Circle either TRUE or FALSE for each statement given below.

[2]

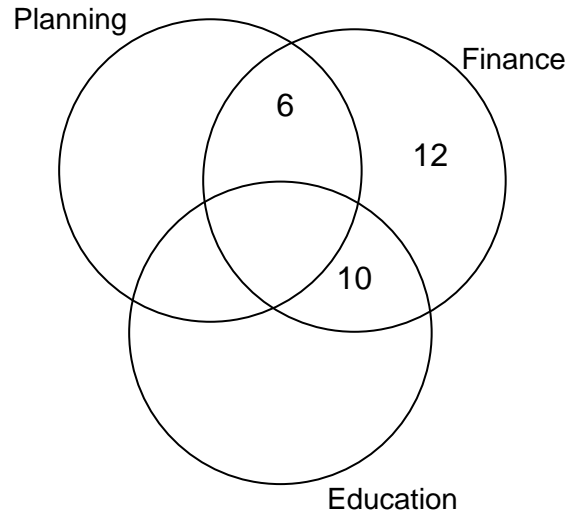
STATEMENT		
Circles with diameters of equal length are congruent.	TRUE	FALSE
Regular pentagons whose perimeters are of equal length are congruent.	TRUE	FALSE
Scalene triangles that have the same three angles are congruent.	TRUE	FALSE
Rectangles with equal areas are congruent.	TRUE	FALSE

4. A total of 45 councillors make up the Planning, Finance and Education committees of a local council.
 Some of the councillors sit on two of these committees.
 No councillor sits on all three committees.

2 councillors sit on both the Planning Committee and the Education Committee.
 There are 18 councillors on the Education Committee.

(a) Complete the Venn diagram.

[3]



.....

.....

.....

.....

(b) How many councillors sit on both the Planning and Finance committees?

[1]

.....

(c) One of these 45 councillors is chosen at random.
 What is the probability that this councillor is on the Planning Committee?

[2]

.....

.....

5.

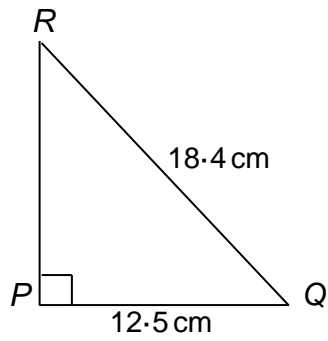


Diagram not drawn to scale

Calculate the length of PR , giving your answer correct to 1 decimal place.

[3]

.....

.....

.....

.....

.....

.....

10. (a) Express $0.\dot{4}9\dot{1}$ as a fraction.

[2]

.....
.....
.....
.....
.....
.....

(b) Is the following statement true or false? Circle the correct answer.
You must give a full explanation of your decision.

The evaluation of $a^{\frac{2}{3}}$ will always be an integer provided a is a multiple of 3.

[1]

true / false

.....
.....
.....

(c) Circle your answer in each of the following.

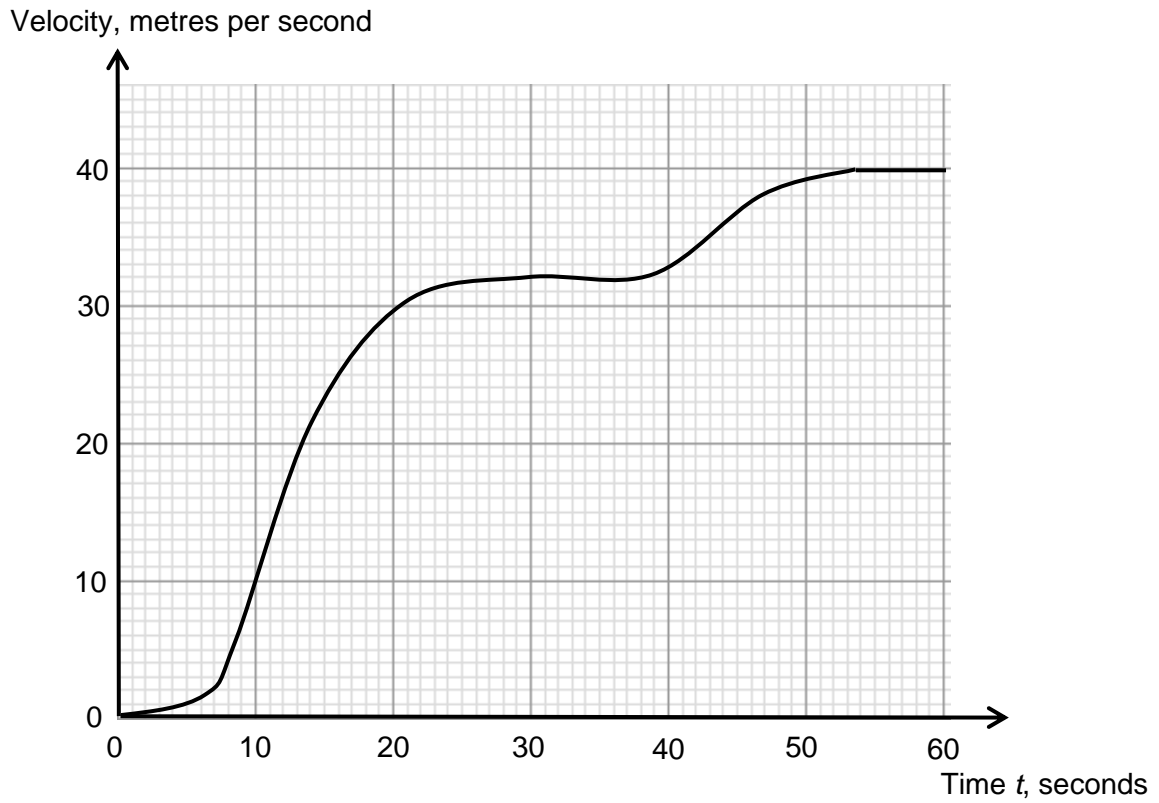
(i) $\sqrt{200}$ simplifies to

20 $10\sqrt{2}$ $20\sqrt{10}$ $100\sqrt{2}$ $2\sqrt{10}$ [1]

(ii) $\sqrt{5} + \sqrt{45}$ simplifies to

$\sqrt{50}$ $\sqrt{225}$ $4\sqrt{5}$ $10\sqrt{5}$ $4\sqrt{10}$ [1]

12. The velocity-time graph shows the first 60 seconds of a train's journey from a station.



(a) Calculate an estimate of the acceleration of the train when $t = 20$ seconds. State the units of your answer.

[4]

.....

.....

.....

.....

.....

